


# Mental Calisthenics

(18)



**Patient's Name:**

**Date:**

# Coding

Below are the numbers 1 through 9. Each number has its own symbol.

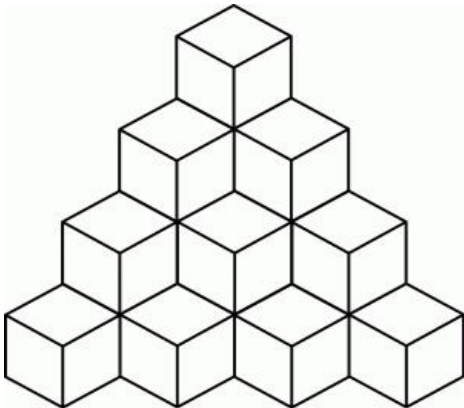
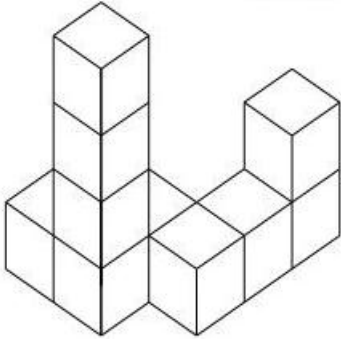
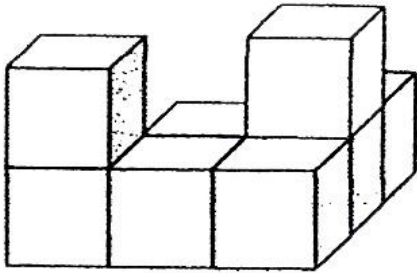
<b>1</b>	<b>2</b>	<b>3</b>	<b>4</b>	<b>5</b>	<b>6</b>	<b>7</b>	<b>8</b>	<b>9</b>
$\alpha$	$\rho$	$\omega$	$\psi$	$\mu$	$\delta$	$\sigma$	$\pi$	$\gamma$

Write the symbol that goes with each number in the table below.  
Do not skip the numbers as you complete the table:

<b>2</b>	<b>5</b>	<b>7</b>	<b>4</b>	<b>9</b>	<b>6</b>	<b>8</b>	<b>4</b>	<b>1</b>
<b>3</b>	<b>1</b>	<b>4</b>	<b>6</b>	<b>8</b>	<b>3</b>	<b>6</b>	<b>4</b>	<b>9</b>
<b>6</b>	<b>4</b>	<b>9</b>	<b>6</b>	<b>2</b>	<b>4</b>	<b>3</b>	<b>1</b>	<b>6</b>
<b>9</b>	<b>5</b>	<b>3</b>	<b>7</b>	<b>1</b>	<b>5</b>	<b>8</b>	<b>2</b>	<b>4</b>
<b>7</b>	<b>8</b>	<b>3</b>	<b>6</b>	<b>2</b>	<b>9</b>	<b>1</b>	<b>2</b>	<b>5</b>
<b>3</b>	<b>2</b>	<b>6</b>	<b>4</b>	<b>8</b>	<b>2</b>	<b>7</b>	<b>9</b>	<b>3</b>
<b>5</b>	<b>8</b>	<b>4</b>	<b>1</b>	<b>3</b>	<b>9</b>	<b>2</b>	<b>4</b>	<b>8</b>
<b>5</b>	<b>8</b>	<b>6</b>	<b>3</b>	<b>7</b>	<b>4</b>	<b>9</b>	<b>1</b>	<b>2</b>
<b>9</b>	<b>3</b>	<b>5</b>	<b>1</b>	<b>7</b>	<b>4</b>	<b>7</b>	<b>9</b>	<b>3</b>
<b>2</b>	<b>8</b>	<b>4</b>	<b>5</b>	<b>3</b>	<b>7</b>	<b>6</b>	<b>2</b>	<b>1</b>
<b>8</b>	<b>4</b>	<b>6</b>	<b>4</b>	<b>8</b>	<b>6</b>	<b>2</b>	<b>1</b>	<b>9</b>
<b>5</b>	<b>7</b>	<b>3</b>	<b>8</b>	<b>6</b>	<b>2</b>	<b>9</b>	<b>1</b>	<b>8</b>

# Cube Counting

**How many cubes make up the stacks? Be sure to count the cubes you see as well as the cubes you do not see.**

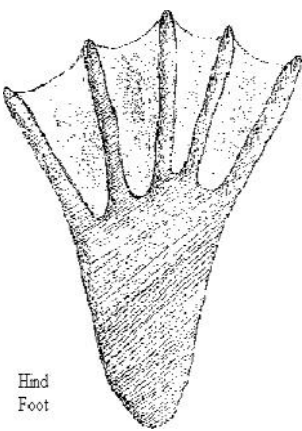


# Self-Esteem Building



**List the best traits/characteristics about yourself as a person:**

# Know Your Tracks



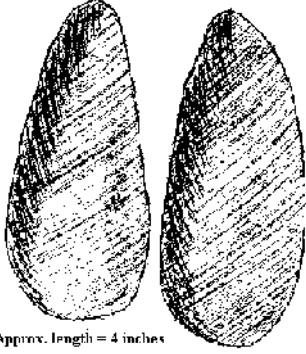
Hind Foot

**Beaver**



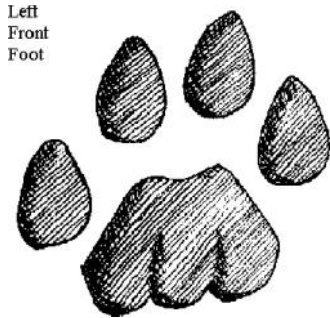
Hind Foot

**Raccoon**




Approx. length = 4 inches

**Wild Pig**

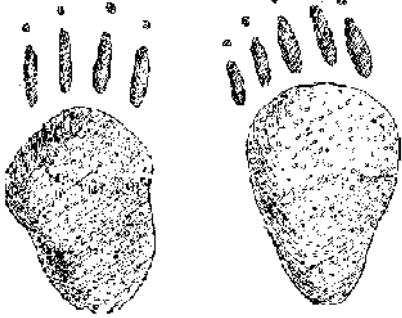


Left Front Foot

**Cougar**



**Black-Tailed Rabbit**



Front foot


Hind foot

**Porcupine**



**Black Bear**

# Logic Puzzle



**Four friends were competing in the internationally renowned Cognitive Solutions Bog Snorkeling competition. Unfortunately, the judges were a little careless and they managed to lose the results. Luckily, a number of spectators were able to remember the following snippets of information:**

**Only one person wore the same number as the position they finished. Gary, who didn't wear green, beat Barry. Larry beat the person who wore yellow. The person who wore number 3, wore green. The person who wore number 2 finished first whereas Harry came last. The person who finished second wore green, Barry wore yellow and the person wearing red beat the person wearing blue.**

**Can you work out who finished where, the number and color they wore?**

# Multiplication Grid

<b>X</b>	<b>1</b>	<b>8</b>	<b>7</b>	<b>4</b>	<b>10</b>	<b>9</b>	<b>11</b>	<b>2</b>	<b>6</b>	<b>12</b>	<b>3</b>	<b>5</b>
<b>4</b>												
<b>7</b>												
<b>10</b>												
<b>5</b>												
<b>11</b>												
<b>9</b>												
<b>6</b>												
<b>2</b>												
<b>12</b>												
<b>8</b>												
<b>1</b>												
<b>3</b>												

**How much time did it take for you to complete? \_\_\_\_\_**

# Logic Links

**Draw a red circle that is to the left of a yellow square and right of a blue triangle.**

**Draw two blue squares with a yellow circle in the middle and two red triangles on either end.**


**Draw two blue circles with a red square between them and two green triangles to the left of the first blue circle and one green triangle to the right of the last blue circle.**

**Draw a blue triangle followed by a red circle and a blue square. The blue square comes before the red circle but after the blue triangle. Draw a green circle before the blue triangle. A yellow square is between blue square and the red circle.**

**Draw a yellow circle last. A green square is in the middle. There is a red triangle on each side of the green square, but a blue square separates the red triangle from the green square on the left and two blue circles separate green square and the red triangle. The first shape is the same shape and color as the third shape.**



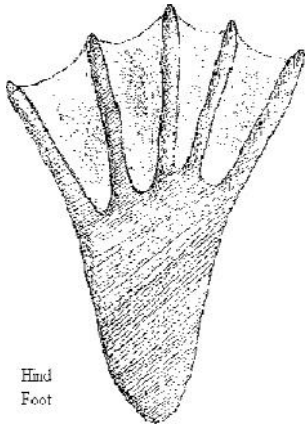
# Word Jumble



**Write two sentences using only the words above.**

# Know Your Tracks

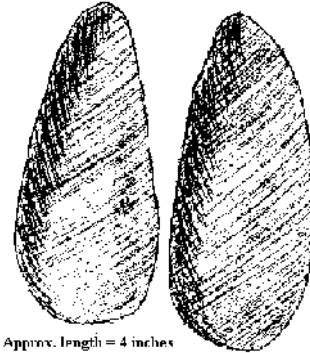
Name the animal that made the track.



Hind Foot

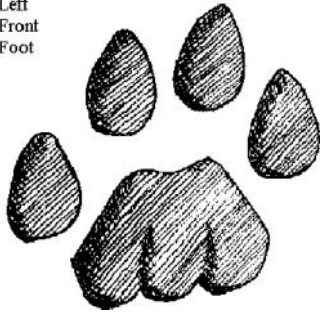


Hind Foot



Approx. length = 4 inches

Left Front Foot



Hind Foot

Front Foot

Front Foot



Front foot



Hind foot

